

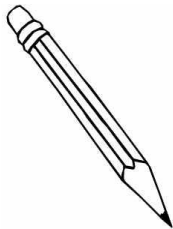


WORK SHEET - II
GRADE: I
EVALUATION-1/ FIRST TERM EXAM, 2019-20
SUBJECT: MATHEMATICS

**Block 1-Nearby Numbers 0 to 10, Block 2-Making 5s and 10s, Block 4-Count 1 to 20,
Block 5-Numbers 11 to 20, Block 6-Introduction to comparing, Block 7-Numbers 20 to 49**

I. Circle the smaller object and underline the bigger object.

a)



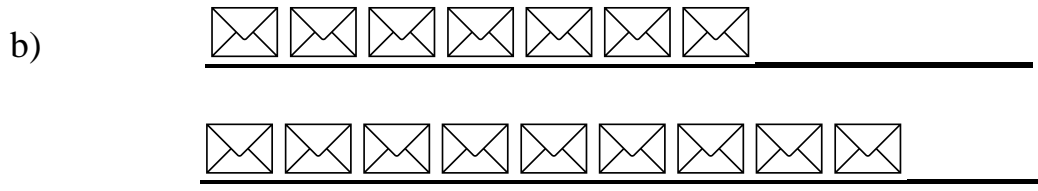
b)




II. Write how many more or less.

a)






III. Find the tens and ones in the picture.



There are _____ tens and _____ ones.



There are _____ tens and _____ ones.

IV. I have 2 tens and 4 extras. What is the number?



v. Change the picture to make 5 apples in total.

